

I will write  
cent as euro.



**A** ✗ the amounts written in cent.

€0.55

25c

€1.75

180c

€0.05

10c

**B** Write these amounts in cent.

1. €1.61 \_\_\_\_\_ 2. €0.48 \_\_\_\_\_ 3. €1.73 \_\_\_\_\_ 4. €0.02 \_\_\_\_\_

5. €1.90 \_\_\_\_\_ 6. €1.27 \_\_\_\_\_ 7. €0.15 \_\_\_\_\_ 8. €1.59 \_\_\_\_\_

**C** Write these amounts using the € symbol.

1. 4c € \_\_\_\_\_ 2. 176c € \_\_\_\_\_ 3. 51c € \_\_\_\_\_ 4. 197c € \_\_\_\_\_

5. 182c € \_\_\_\_\_ 6. 1c € \_\_\_\_\_ 7. 100c € \_\_\_\_\_ 8. 138c € \_\_\_\_\_

**D** Fill in the change you would get from €2.

1.  €1.46  
change:  
€ \_\_\_\_\_

2.  58c  
change  
€ \_\_\_\_\_

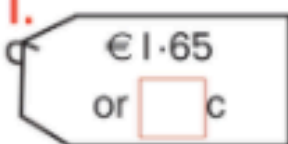
3.  €1.94  
change:  
€ \_\_\_\_\_

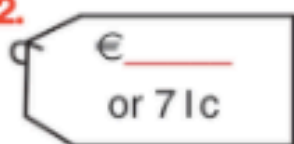
4.  €1.73  
change:  
€ \_\_\_\_\_

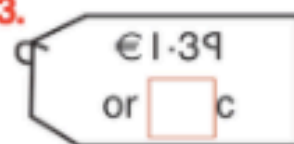
5.  €1.31  
change:  
€ \_\_\_\_\_

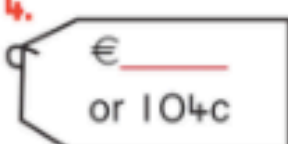
6.  99c  
change:  
€ \_\_\_\_\_

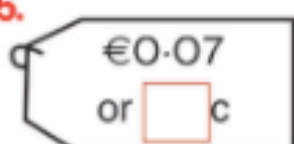
**E** Help Joe the shopkeeper to write the price tags for his shop.

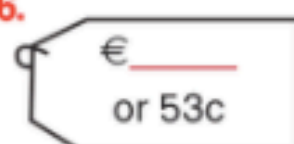
1.  €1.65  
or  c

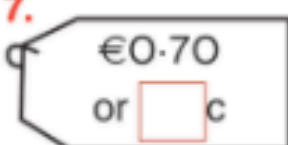
2.  € \_\_\_\_\_  
or 71c

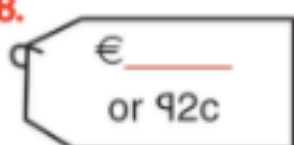
3.  €1.39  
or  c

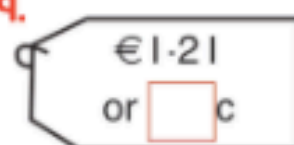
4.  € \_\_\_\_\_  
or 104c

5.  €0.07  
or  c

6.  € \_\_\_\_\_  
or 53c

7.  €0.70  
or  c

8.  € \_\_\_\_\_  
or 92c

9.  €1.21  
or  c

