















A Listen to your teacher.

B Use the pictures in A to fill in each sentence.

cup jug bucket fish tank swimming pool

- The _____ holds the most water.
- The _____ holds the least amount of water.
- The _____ holds less water than the fish tank.
- The _____ holds more water than the _____.

C Fill in the table below. Estimate first and then measure and count.

how many?	fill a	estimate	measurement
jugs 	bucket 		
cups 	jug 		
bowls 	bucket 		
bottles 	bucket 		
cups 	bottle 		
cups 	bucket 		
bowls 	jug 