


A Date: ___/___/___

1. Colour $\frac{1}{4}$.



2. 4 tens 0 units =

$$\begin{array}{r} 69 \\ + 45 \\ \hline \end{array}$$



4. $\frac{1}{4}$ of 20 = ?

5 4 10

5. $(6 + 5) + 8 =$

6. How many bottles will fill the bucket?



7. Put in order from smallest to largest.
156, 89, 199, 104, 46

, , ,
,


8. There are hours in a day.

9. $(5 + 6) - 10 =$

10. Write < or > or =.
 $\frac{1}{4}$ m 25 cm

B Date: ___/___/___

$$\begin{array}{r} 12 \\ + 64 \\ \hline \end{array}$$



2. How many sweets?



3. Circle the smallest.
105 130 155 65 17

4.



5. can roll and has 3 faces.

6. $88 - 40 =$

C Date: ___/___/___

1. Round 94 to the nearest 10.


90 100

2. $17 - 8 =$

3.



$$\begin{array}{r} 17 \\ + 78 \\ \hline \end{array}$$



5. €1.09 = c

6. Circle the lighter bag.



7. $11 + 5 = 13 + 6 -$

8. 700 =

H T U

9. $\frac{1}{4}$ of 80 = ?

10 20 40

10. Double 70.

100 120 140